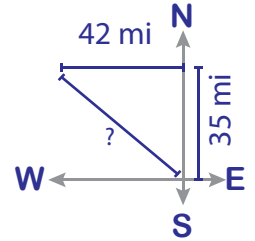


Pythagorean Theorem

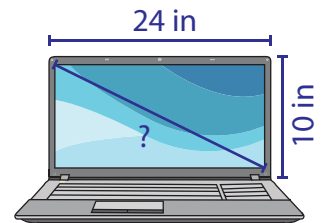
Level 1: S1

Solve the word problems. Round the answer to the nearest tenth.

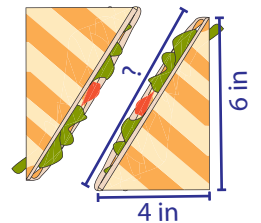
- 1) Mark is on his way home from work. He drives 35 miles due North and then 42 miles due West. Find the shortest distance he can cover to reach home early.



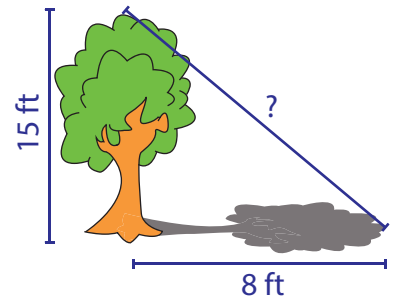
- 2) Joshua won a laptop in a school raffle. The laptop screen measures 10 inches in height and 24 inches in width. Find the diagonal length of the laptop screen.



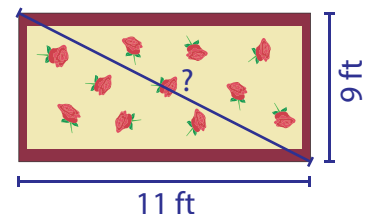
- 3) Joey made a sandwich that was 4 inches long and 6 inches high. If he cuts the sandwich in half as shown in the figure, what would be the diagonal length of the sandwich?



- 4) A 15 feet tree casts a shadow that is 8 feet long. What is the distance from the tip of the tree to the tip of its shadow?



- 5) Rachel bought a rug for her apartment. The rug is 11 feet long and 9 feet wide. Find the diagonal length of the rug.

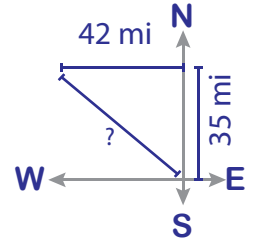


Pythagorean Theorem

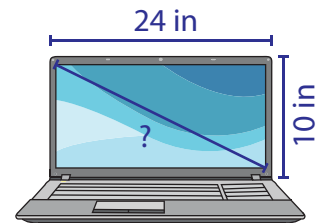
Level 1: S1

Solve the word problems. Round the answer to the nearest tenth.

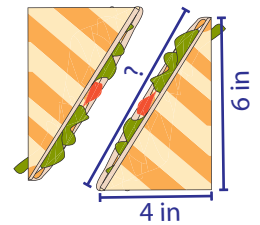
- 1) Mark is on his way home from work. He drives 35 miles due North and then 42 miles due West. Find the shortest distance he can cover to reach home early.

54.7 mi

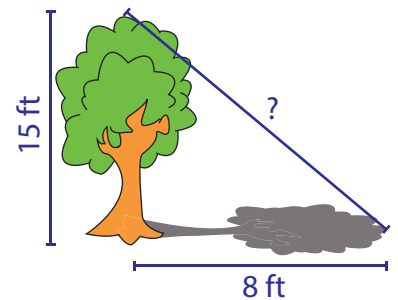
- 2) Joshua won a laptop in a school raffle. The laptop screen measures 10 inches in height and 24 inches in width. Find the diagonal length of the laptop screen.

26 in

- 3) Joey made a sandwich that was 4 inches long and 6 inches high. If he cuts the sandwich in half as shown in the figure, what would be the diagonal length of the sandwich?

7.2 in

- 4) A 15 feet tree casts a shadow that is 8 feet long. What is the distance from the tip of the tree to the tip of its shadow?

17 ft

- 5) Rachel bought a rug for her apartment. The rug is 11 feet long and 9 feet wide. Find the diagonal length of the rug.

14.2 ft